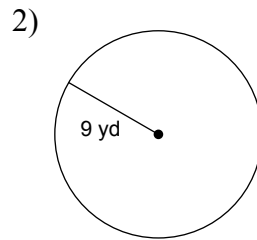
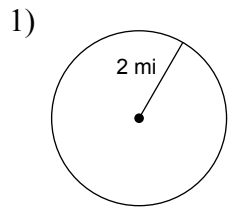
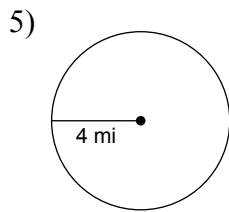
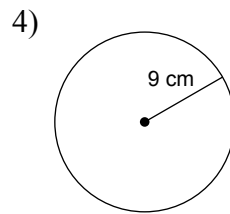
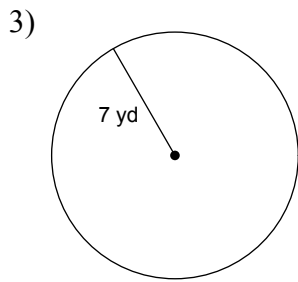


Assignment

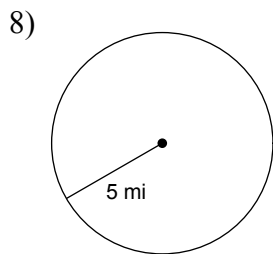
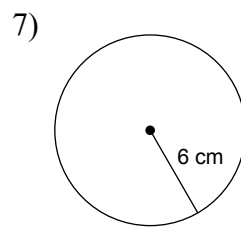
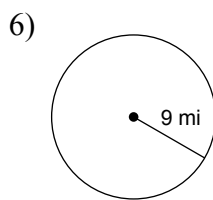
Find the diameter of each circle.



Find the area of each.



Find the circumference of each circle.



Find the radius of each circle.

9) circumference = 12π cm

10) circumference = 4π mi

11) circumference = 18π ft

Find the diameter of each circle.

12) circumference = 24π yd

13) circumference = 16π cm

14) circumference = 18π cm

Find the radius of each circle.

15) area = 121π yd²

16) area = 49π ft²

17) area = 144π mi²

Find the diameter of each circle.

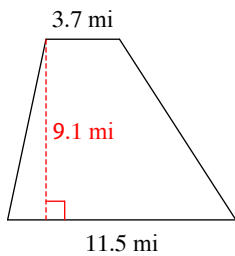
18) area = 49π mi²

19) area = 25π mi²

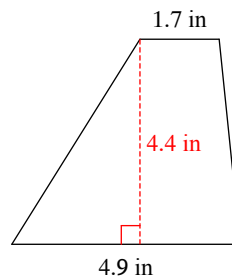
20) area = 100π km²

Find the area of each.

21)



22)



Answers to Assignment (ID: 1)

- | | | | |
|----------------------------|---------------------------|----------------------------|----------------------------|
| 1) 4 mi | 2) 18 yd | 3) 49π yd ² | 4) 81π cm ² |
| 5) 16π mi ² | 6) 18π mi | 7) 12π cm | 8) 10π mi |
| 9) 6 cm | 10) 2 mi | 11) 9 ft | 12) 24 yd |
| 13) 16 cm | 14) 18 cm | 15) 11 yd | 16) 7 ft |
| 17) 12 mi | 18) 14 mi | 19) 10 mi | 20) 20 km |
| 21) 69.16 mi ² | 22) 14.52 in ² | | |